



Name _____

Cross out to subtract.


$5 - 0 = \underline{\hspace{2cm}}$



$5 - 1 = \underline{\hspace{2cm}}$




$5 - 2 = \underline{\hspace{2cm}}$



$5 - 3 = \underline{\hspace{2cm}}$



$5 - 4 = \underline{\hspace{2cm}}$



$5 - 5 = \underline{\hspace{2cm}}$

