


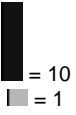


# February 2012

# First Grade-Math

SUNDAY	MONDAY	TUESDAY	WEDNESDAY	THURSDAY	FRIDAY	SATURDAY
			<p>1 Which is longer: from your knee to your ankle or from your elbow to the tip of your fingers? How do you know?</p>	<p>2 Who would you predict would have the longest pants in your family? How could check your prediction?</p>	<p>3 Which has a longer side? Name the shape in your answer. </p>	<p>4 Play this month's game.</p>
<p>5 Play this month's game.</p>	<p>6 Why do you need to use the same non-standard unit to measure an object?</p>	<p>7 How many steps does it take for you to walk from the front door to your bedroom? Estimate, then measure.</p>	<p>8 Use a piece of paper to measure a table in your house. How many units long was your table?</p>	<p>9 Use your pinky to measure the length and the width of a piece of paper. Are your measurements different? Why?</p>	<p>10 How can you tell if a spaghetti noodle or a shoe string is longer? Explain how you measure the two objects.</p>	<p>11 Play this month's game.</p>
<p>12 Play this month's game.</p>	<p>13 Write the 4 sentences for the fact family 8, 2, 10.</p>	<p> 14 How many pieces of the puzzle are white? Write your answer as a fraction.</p>	<p>15 My mom gave me 20 pieces of candy. I split the candy with 4 of my friends. How many pieces of candy did we all get? Draw a picture and explain your answer.</p>	<p>16 Find a cylinder in your home. Draw and label a picture of the object.</p>	<p>17 I started counting backwards from 50 by 5's. What numbers did I say?</p>	<p>18 Play this month's game.</p>
<p>19 Play this month's game.</p>	<p>20 <b>Winter Break</b></p> <hr style="width: 50%; margin-left: 10%;"/>	<p>21</p>	<p>22</p>	<p>23</p>	<p>24</p>	<p>25 Play this month's game.</p>
<p>26 Play this month's game.</p>	<p> 27 What number does this represent? <i>Notice the key to the right.</i></p>	<p>28 Write yesterday's number is 2 different ways?</p>	<p>29 My brother said that <math>9 - 4 = 13</math>. Is he correct? How can you prove it?</p>	<p></p>		

